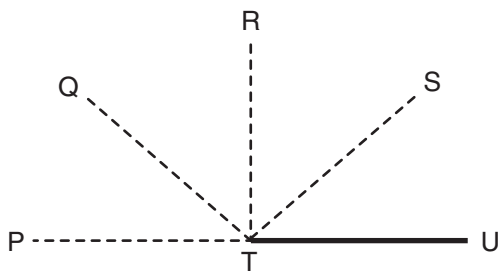


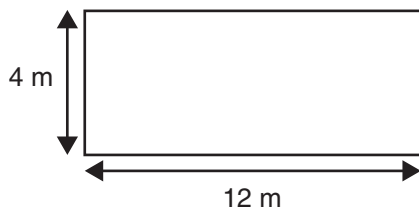
- 1** Last year, 34 boys and 28 girls started a club. Nobody left the club. This year, 13 more boys and 7 more girls joined the club. How many people are in the club this year?

A 20
B 54
C 62
D 82

- 2** Which line makes an angle of 135° with TU?



A TP
B TQ
C TR
D TS

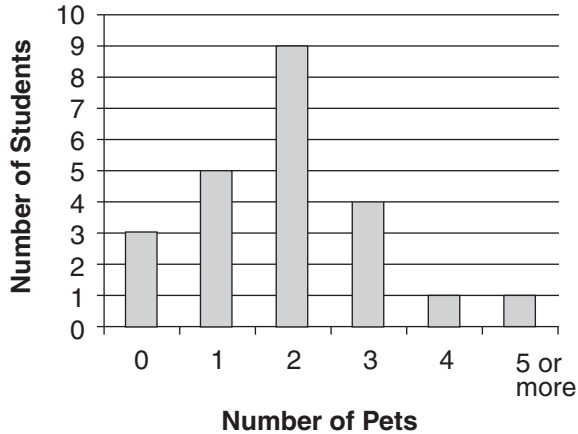


3 What is the area of the rectangle?

- A** 3 m²
- B** 16 m²
- C** 32 m²
- D** 48 m²

4 This graph shows the number of pets owned by the students in Class 5.

Pets Owned by Class 5 Students



How many students have 2 or more pets?

- A** 9
- B** 15
- C** 16
- D** 23